



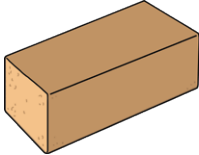




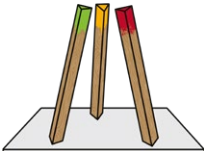


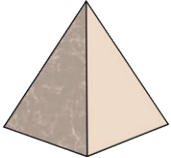





Identify 2D Shapes and 3D Objects

Write the correct name of each 2D shape and 3D object below.

 <p>_____</p>	 <p>_____</p>	 <p>_____</p>	 <p>_____</p>
 <p>_____</p>	 <p>_____</p>	 <p>_____</p>	 <p>_____</p>
 <p>_____</p>	 <p>_____</p>	 <p>_____</p>	 <p>_____</p>
 <p>_____</p>	 <p>_____</p>	 <p>_____</p>	 <p>_____</p>

Challenge:

Which of these statements are correct?

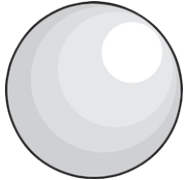
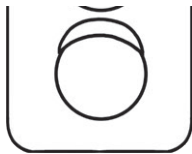


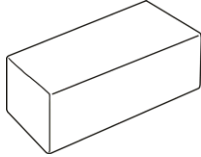




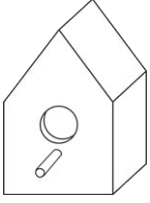

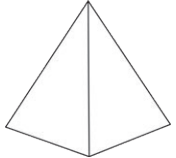


- A rectangle has equal edges.
- A cube has 6 faces.
- A hexagon has 5 edges.
- A triangular prism can roll.

Explain your reasoning.

I know this because _____

Identify 2D Shapes and 3D Objects **Answers**

Write the correct name of each 2D shape and 3D object below.

 <p>sphere</p>	 <p>circle</p>	 <p>triangle</p>	 <p>cone</p>
 <p>rectangular prism</p>	 <p>cylinder</p>	 <p>octagon</p>	 <p>cube</p>
 <p>rectangle</p>	 <p>triangular prism</p>	 <p>rhombus</p>	 <p>cube</p>
 <p>square-based pyramid</p>	 <p>pentagon</p>	 <p>hexagon</p>	 <p>circle</p>

Challenge:

Which of these statements are correct?







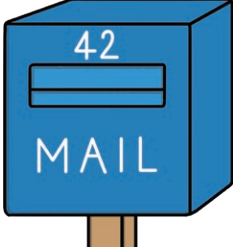

- A rectangle has equal edges.
- A cube has 6 faces.**
- A hexagon has 5 edges.
- A triangular prism can roll.

Explain your reasoning.

I know this because **Teacher check.**

Identify 2D Shapes and 3D Objects

Using the word bank, write the correct name of each 2D shape and 3D object below.

 <input type="text"/>	 <input type="text"/>	 <input type="text"/>	 <input type="text"/>
 <input type="text"/>	 <input type="text"/>	 <input type="text"/>	 <input type="text"/>

Word Bank

sphere

cone

triangle

circle

square

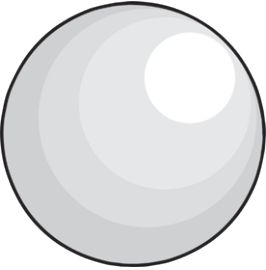

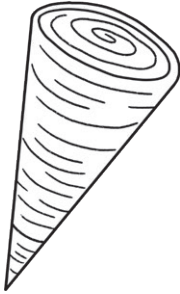





rectangle

rectangular
prism

cube





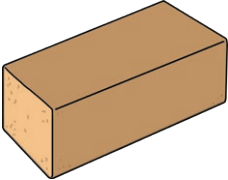




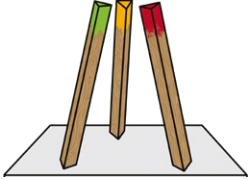


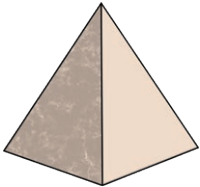



Identify 2D Shapes and 3D Objects **Answers**

Using the word bank, write the correct name of each 2D shape and 3D object below.

 <p>sphere</p>	 <p>rectangle</p>	 <p>cone</p>	 <p>triangle</p>
 <p>rectangular prism</p>	 <p>square</p>	 <p>cube</p>	 <p>circle</p>

Identify 2D Shapes and 3D Objects

Using the word bank on the next page, write the correct name of each 2D shape and 3D object below.

 <input type="text"/>	 <input type="text"/>	 <input type="text"/>	 <input type="text"/>
 <input type="text"/>	 <input type="text"/>	 <input type="text"/>	 <input type="text"/>
 <input type="text"/>	 <input type="text"/>	 <input type="text"/>	 <input type="text"/>
 <input type="text"/>	 <input type="text"/>	 <input type="text"/>	 <input type="text"/>

Word Bank

sphere

circle

square-based
pyramid

triangular
prism

octagon

triangle

rectangle

rhombus

cone

cylinder

hexagon

pentagon

cube

circle

rectangular
prism

cube

Identify 2D Shapes and 3D Objects **Answers**

Using the word bank on the next page, write the correct name of each 2D shape and 3D object below.

 <p>sphere</p>	 <p>circle</p>	 <p>triangle</p>	 <p>cone</p>
 <p>rectangular prism</p>	 <p>cylinder</p>	 <p>octagon</p>	 <p>cube</p>
 <p>rectangle</p>	 <p>triangular prism</p>	 <p>rhombus</p>	 <p>cube</p>
 <p>square-based pyramid</p>	 <p>pentagon</p>	 <p>hexagon</p>	 <p>circle</p>